





### A1 Complète pour avoir 1 000.



$$6 \text{ centaines} + 4 \text{ centaines} \\ 600 + 400 = 1000$$



$$8 \text{ centaines} + 2 \text{ centaines} \\ 800 + 200 = 1000$$

### A2 Calcule le complément à 1 000.

- 5 centaines + 5... centaines = 1 000
- 3 centaines + 7... centaines = 1 000
- 9 centaines + 1... centaine = 1 000
- 8 centaines + 2 centaines = 1 000

### A3 Calcule le complément à 1 000.

- 700 + 300 = 1 000
- 200 + 800 = 1 000
- 600 + 400 = 1 000
- 500 + 500 = 1 000
- 900 + 100 = 1 000
- 800 + 200 = 1 000
- 700 + 300 = 1 000
- 950 + 50 = 1 000
- 850 + 150 = 1 000